


First Grade  
Summer Review  
Packet



Weeks 6-10

# Monday, Week 6



## MATH

Write greater than (>), less than (<) or equal to (=).

12	>	11
13		12
25		27
31		38
34		34
50		15
32		33

100		80
16		61
42		42
74		73
79		91
35		29
23		23


## ELA

Read the passage and answer the questions.

*It was dark in the woods. Mary was scared. She held her big brother's hand tightly as they walked. Suddenly, there was a loud noise. Mary screamed! But it was only a rabbit.*

1. Whose hand did Mary hold? \_\_\_\_\_
2. Why was Mary scared? \_\_\_\_\_  
\_\_\_\_\_
3. What made the loud noise? \_\_\_\_\_  
\_\_\_\_\_





MATH

What is the missing addend or minuend?

- |     |                                      |     |                                      |
|-----|--------------------------------------|-----|--------------------------------------|
| 1.  | $6 + \underline{\hspace{2cm}} = 12$  | 11. | $\underline{\hspace{2cm}} - 6 = 2$   |
| 2.  | $7 + \underline{\hspace{2cm}} = 17$  | 12. | $\underline{\hspace{2cm}} - 4 = 1$   |
| 3.  | $9 + \underline{\hspace{2cm}} = 12$  | 13. | $\underline{\hspace{2cm}} - 3 = 4$   |
| 4.  | $5 + \underline{\hspace{2cm}} = 15$  | 14. | $\underline{\hspace{2cm}} - 2 = 1$   |
| 5.  | $2 + \underline{\hspace{2cm}} = 22$  | 15. | $\underline{\hspace{2cm}} - 7 = 0$   |
| 6.  | $10 + \underline{\hspace{2cm}} = 50$ | 16. | $\underline{\hspace{2cm}} - 10 = 5$  |
| 7.  | $14 + \underline{\hspace{2cm}} = 16$ | 17. | $\underline{\hspace{2cm}} - 9 = 3$   |
| 8.  | $17 + \underline{\hspace{2cm}} = 19$ | 18. | $\underline{\hspace{2cm}} - 10 = 9$  |
| 9.  | $15 + \underline{\hspace{2cm}} = 15$ | 19. | $\underline{\hspace{2cm}} - 20 = 10$ |
| 10. | $11 + \underline{\hspace{2cm}} = 14$ | 20. | $\underline{\hspace{2cm}} - 28 = 2$  |

ELA

Rewrite the sentences on the lines below. Add capital letters and ending punctuation.

1. i love going to the beach in summer

---



---

2. the whole family sleeps in late i love sleeping in

---



---

3. my sister suzie always gets up first she makes breakfast

---



---

# Wednesday, Week 6



## MATH

Add these numbers together.

$\begin{array}{r} 10 + \\ \underline{5} \end{array}$	$\begin{array}{r} 10 + \\ \underline{3} \end{array}$	$\begin{array}{r} 14 + \\ \underline{5} \end{array}$	$\begin{array}{r} 20 + \\ \underline{4} \end{array}$	$\begin{array}{r} 32 + \\ \underline{3} \end{array}$
$\begin{array}{r} 50 + \\ \underline{6} \end{array}$	$\begin{array}{r} 20 + \\ \underline{7} \end{array}$	$\begin{array}{r} 11 + \\ \underline{6} \end{array}$	$\begin{array}{r} 40 + \\ \underline{3} \end{array}$	$\begin{array}{r} 70 + \\ \underline{1} \end{array}$
$\begin{array}{r} 40 + \\ \underline{2} \end{array}$	$\begin{array}{r} 30 + \\ \underline{8} \end{array}$	$\begin{array}{r} 31 + \\ \underline{4} \end{array}$	$\begin{array}{r} 50 + \\ \underline{9} \end{array}$	$\begin{array}{r} 83 + \\ \underline{3} \end{array}$

## ELA

Circle the correct sight word on each line. Copy the sight word onto the line.

1) wen when whent wenh

\_\_\_\_\_

-----

\_\_\_\_\_

2) out ourt ot ut uot

\_\_\_\_\_

-----

\_\_\_\_\_

3) frist ferst first firs

\_\_\_\_\_

-----

\_\_\_\_\_

4) hou how huor hwo

\_\_\_\_\_

-----

\_\_\_\_\_

5) werk werc wirk work worc

\_\_\_\_\_

-----

\_\_\_\_\_

6) hoo wo wh who hu

\_\_\_\_\_

-----

\_\_\_\_\_

# Thursday, Week 6

## MATH

Add these numbers together.




$62 +$ <u>10</u>	$18 +$ <u>20</u>	$44 +$ <u>30</u>	$89 +$ <u>10</u>	$82 +$ <u>10</u>
$59 +$ <u>10</u>	$52 +$ <u>20</u>	$11 +$ <u>50</u>	$47 +$ <u>30</u>	$79 +$ <u>20</u>
$48 +$ <u>10</u>	$73 +$ <u>20</u>	$61 +$ <u>30</u>	$13 +$ <u>70</u>	$46 +$ <u>20</u>

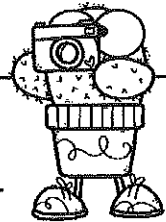
## ELA

Look at the picture and write a story about it.

Handwriting practice lines consisting of solid top and bottom lines with a dashed middle line. There are seven sets of these lines provided for writing a story.


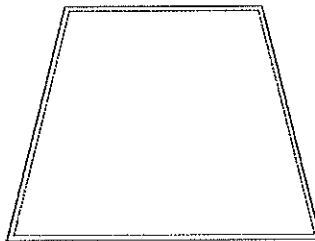
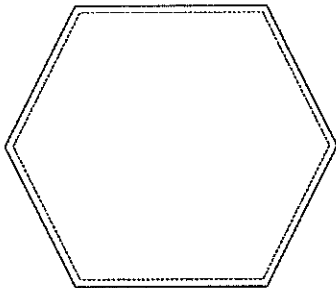
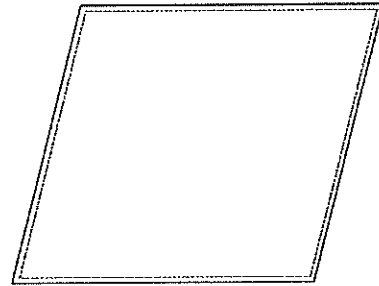
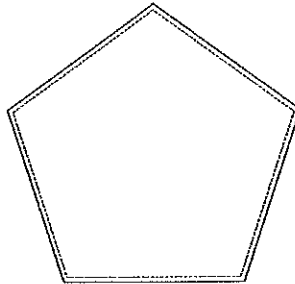
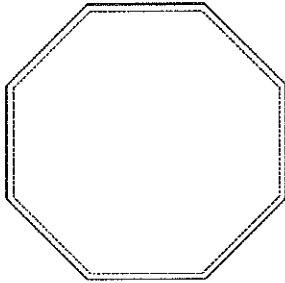


# Friday, Week 6



## MATH


Count the number of vertices of each shape. Write the number inside the shape.



## ELA

Find 15 words in the word search with the following endings. Write the words in the boxes.

S	A	C	K	A	S	I	N	G	B
T	R	A	C	K	I	B	C	D	A
I	E	F	G	H	G	I	J	K	C
N	L	M	N	O	H	P	Q	R	K
G	M	I	G	H	T	R	I	N	G
P	S	T	F	I	G	H	T	U	K
A	V	W	X	Y	Z	A	B	C	I
C	F	L	I	G	H	T	D	E	N
K	F	G	W	I	N	G	H	I	G
L	I	G	H	T	J	K	L	M	N
C	R	A	C	K	O	P	Q	R	S





-ack	-ight	-ing

# Weekend 6

## OUTDOOR FUN

Draw and label 4 outdoor activities you participated in this weekend.





MATH

Read the word problem.

There were 12 birds on a branch. 5 more birds joined them.  
How many birds were now on the branch?

Draw a picture of the word problem.

Write and solve the number sentence.

\_\_\_\_\_ + \_\_\_\_\_ = \_\_\_\_\_

ELA


Read the passage and answer the questions.

*Mrs. Chan made a plate of cupcakes for the school fair. She gave them to Grace. Grace took the cupcakes to school. She sold them in ten minutes! They tasted good.*

1. Who made the cupcakes? \_\_\_\_\_
2. Why did Grace take the cakes to school? \_\_\_\_\_  
\_\_\_\_\_
3. How long did it take to sell the cupcakes? \_\_\_\_\_








MATH

Look carefully at the graph and answer the questions.



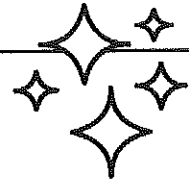
- How many cats + dogs? \_\_\_\_\_
- How many animals are shown on the graph? \_\_\_\_\_
- How many more dogs than birds? \_\_\_\_\_

ELA

Think of ten verbs and write them below. In the box beside, write a noun that might perform the verb, e.g. DANCE > BALLERINA.


<u>VERB</u>	<u>NOUN</u>	<u>VERB</u>	<u>NOUN</u>
1.		6.	
2.		7.	
3.		8.	
4.		9.	
5.		10.	

# Wednesday, Week 7




## MATH

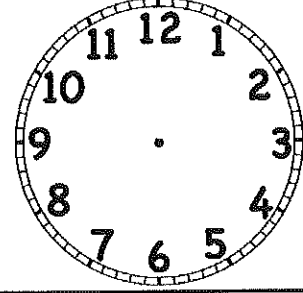
Draw the time shown below each clock.




5:00




4:30



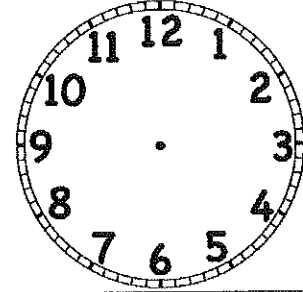
11:30



8:00



3:30



midnight

## ELA

Categorize the verbs as PAST, PRESENT or FUTURE. Add three more to each category.


jumped	flying	will fly	will talk	hopped	write	drew	will cook	singing
--------	--------	----------	-----------	--------	-------	------	-----------	---------

past

present

future

# Thursday, Week 7



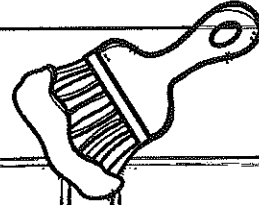
## MATH









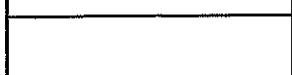



Fill in the table by counting ten more and ten less.

		20		
		40		
		60		
		80		
		100		
		120		

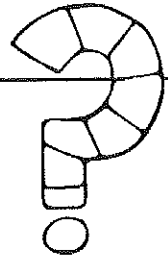
## ELA

Write a synonym for each word. Illustrate the words.




			
big	hot	finish	angry
			
easy	shout	little	begin
			

# Friday, Week 7



## MATH

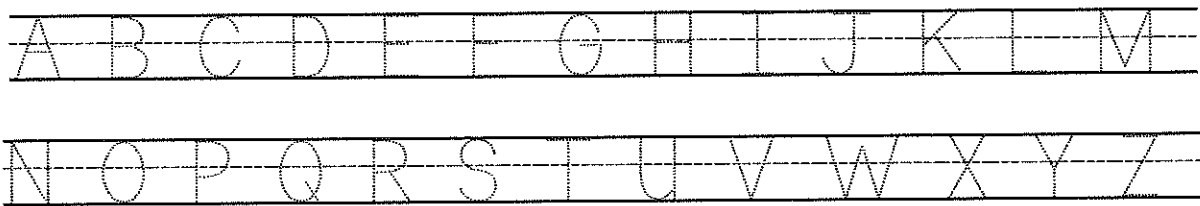
Draw lines to cut these shapes in quarters. Pattern one quarter of each shape.  
(Careful! Not all shapes can be cut into quarters!)



## ELA



Trace over the letters of the alphabet. Write the words in the box in ABC order.




wind	sun
rain	sky
star	moon
cloud	space

1	_____	5	_____
	_____		_____
	_____		_____
2	_____	6	_____
	_____		_____
	_____		_____
3	_____	7	_____
	_____		_____
	_____		_____
4	_____	8	_____
	_____		_____
	_____		_____


# Weekend 7

## GAME MAKER


Make up fun games using the objects below. Explain the games to someone else.




I explained this game to someone.



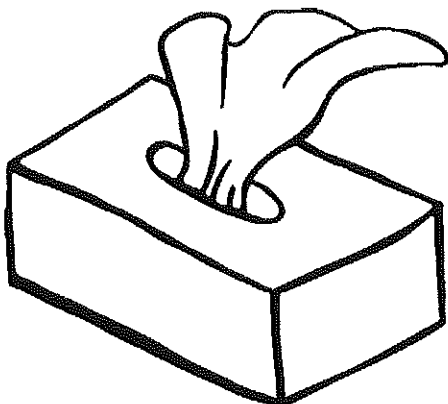
I explained this game to someone.




I explained this game to someone.



I explained this game to someone.



I explained this game to someone.



I explained this game to someone.

# Monday, Week 8



## MATH

Read the word problem.

Dad made 17 cakes. Joanne ate 9 of them. How many cakes were left?

Draw a picture of the word problem.

Write and solve the number sentence.

\_\_\_\_\_ - \_\_\_\_\_ = \_\_\_\_\_

## ELA

Read the passage and answer the questions.

*The cat lived next-door, but he was always coming into our garden to chase birds. One day, I went outside. The cat hissed and jumped the fence. He never came back.*

1. Where did the cat live? \_\_\_\_\_

2. What did the cat like to do in the garden? \_\_\_\_\_

\_\_\_\_\_

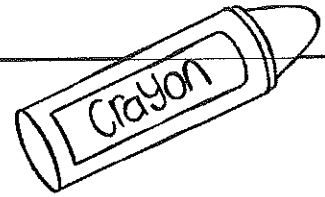
3. What did the cat do when I went outside? \_\_\_\_\_

\_\_\_\_\_





Wednesday, Week 8



MATH

Follow the instructions to draw the following...

Draw a house between two mountains.	Draw a sandwich inside a box.
Draw a cow beside a fence.	Draw a jellyfish beneath the waves.

ELA

Add the commas to these sentences. Rewrite the sentence below.

1. Terry Mike Bill Alison and Jill went to the party.

---

---

2. The flavors are chocolate caramel vanilla and banana.

---

---

3. I like tennis baseball lacrosse basketball and ice hockey.

---

---



Thursday, Week 8

MATH

Here are the people in Allie's family. Write them in order from youngest to eldest.



Mom, 41




Dad, 53




Rick, 18



Daryl, 17



Greenie, 6



Allie, 21

1. \_\_\_\_\_
2. \_\_\_\_\_
3. \_\_\_\_\_
4. \_\_\_\_\_
5. \_\_\_\_\_
6. \_\_\_\_\_

ELA

Shade the boxes in different colors.

BLUE  
FIRST PERSON  
POINT OF VIEW

RED  
SECOND PERSON  
POINT OF VIEW

YELLOW  
THIRD PERSON  
POINT OF VIEW

I went to the park.  
It was a sunny day.  
I had a lot of fun.

You had a cool  
drink. You liked it.

I was  
sweating!



Harry ate a  
strawberry  
ice cream.



We swam in  
the pool for  
two hours. We  
had a good day.

The little girl found a  
shell on the beach. She  
picked it up.



You are having a great summer  
vacation at your gran's beach house!

Shane made a  
sandcastle.



# Friday, Week 8

## MATH

Match the number sentences with their answer and their flip-flop. Use different colors.

$20 + 10$

$2 + 30$

$20 + 2$

$35 + 5$

$50 + 4$

$90 + 2$

$5 + 40$

$1 + 20$

$70 + 8$

$22$

$30$

$40$

$21$

$32$

$54$

$78$

$92$

$45$

$5 + 35$

$4 + 50$

$2 + 90$

$8 + 70$

$2 + 20$

$10 + 20$

$40 + 5$

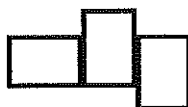

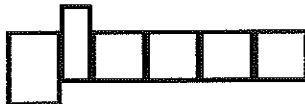
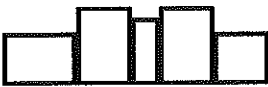
$30 + 2$

$20 + 1$

## ELA

Match the words to the boxes underneath. Write any five of them on the lines.

please	she	after	white
was	went	when	why



\_\_\_\_\_

\_\_\_\_\_

\_\_\_\_\_

\_\_\_\_\_

\_\_\_\_\_

\_\_\_\_\_

\_\_\_\_\_

\_\_\_\_\_

\_\_\_\_\_

\_\_\_\_\_

# Weekend 8

## WATER CONSERVATION

It is important not to waste water. Think of 3 ways you can help save water this summer. Illustrate your ideas.

How to save water...

---

---

---

---

---

---

---

---

---



MATH

Write the equations under TRUE or FALSE.

TRUE	FALSE


$5 - 2 = 7 - 1$	$5 - 1 = 6 - 2$	$3 - 3 = 5 - 4$	$7 - 4 = 6 - 3$
$7 - 6 = 4 - 2$	$10 - 5 = 6 - 1$	$8 - 4 = 4 - 0$	$3 - 0 = 10 - 4$

ELA


Read the passage and answer the questions.

*Mom read stories to me every night. My favorites were fairy tales. I imagined that I was a knight, who rescued people from dragons. Mom thought I'd be a friendly knight.*

1. What were his favorite stories? \_\_\_\_\_
2. What did he imagine he would be? \_\_\_\_\_  
\_\_\_\_\_
3. When did Mom read stories? \_\_\_\_\_  
\_\_\_\_\_



# Tuesday, Week 9




## MATH

Color two numbers (or one number) in the same color to make 20.

13	3	10	7	16	9	2
1	14	5	18	12	19	20
15	10	4	11	17	8	6

## ELA


Match the words to their antonyms by shading them the same color.

hot		polite
dirty		smile
frown		smooth
pull		strong
rude		play
slowly		cold
rough		push
weak		clean
work		quickly

# Wednesday, Week 9

## MATH

Count by 3s to 30. Fill in the missing numbers.



Color Mr. Caterpillar if you can count forwards and backwards by 3s to 30.



## ELA

Read the words and write them under the correct headings.

strength	after	sed	spin	all
playd	moovie	whent	trying	ov

REAL WORDS	NONSENSE WORDS

# Thursday, Week 9



## MATH

Write greater than (>), less than (<) or equal to (=).

12	>	11	100		200
89		98	21		26
56		47	43		42
12		20	65		65
49		54	101		110
51		51	27		37
77		57	19		81

## ELA

Color the diphthong that appears in the word of the picture. Write the word below.

ie	au	ow	ou

ow	ea	oi	oo

oi	ee	oy	ai

au	ou	ey	or

ew	oy	oo	ea

ou	ea	ay	oy

# Friday, Week 9



## MATH

Read the word problem.

Sam had 7 brown dogs, 8 white dogs and 4 black dogs. How many dogs did she have in total?

Draw a picture of the word problem.

Write and solve the number sentence.

\_\_\_\_\_ = \_\_\_\_\_

## ELA



Decide whether the following are sentences or fragments. Circle your response.


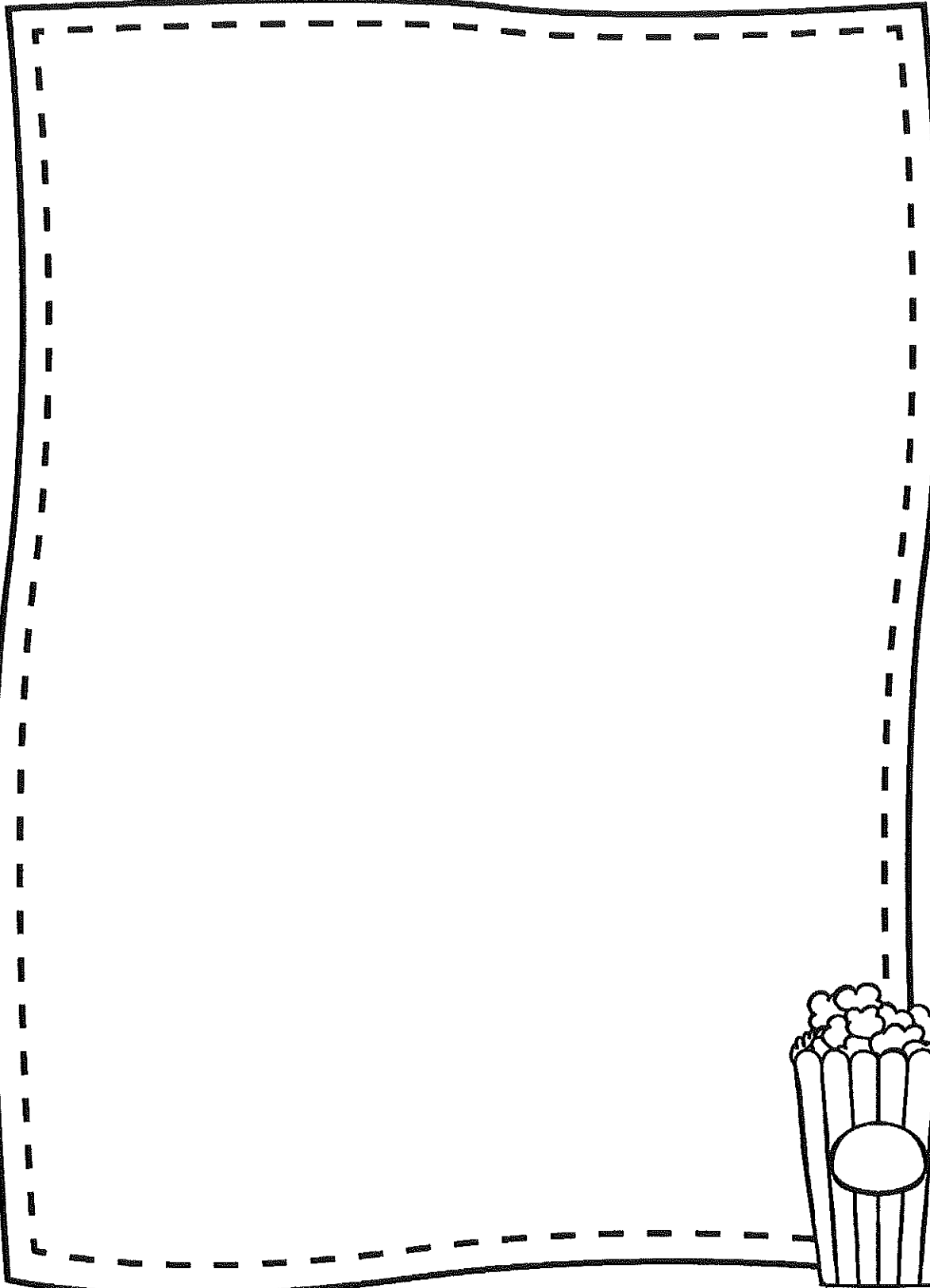
1) I have a bottle of sunscreen in my bag.	SENTENCE / FRAGMENT
2) I don't like when.	SENTENCE / FRAGMENT
3) Archie and Matt went to the beach on Sunday.	SENTENCE / FRAGMENT
4) Summer is the best season of the year.	SENTENCE / FRAGMENT
5) I saw a.	SENTENCE / FRAGMENT
6) It was a hot.	SENTENCE / FRAGMENT
7) I like warm weather.	SENTENCE / FRAGMENT
8) It is time for us to eat our.	SENTENCE / FRAGMENT
9) Dad put up our beach umbrella.	SENTENCE / FRAGMENT
10) You need to wear a hat in the sun.	SENTENCE / FRAGMENT
11) I want to play games with my.	SENTENCE / FRAGMENT

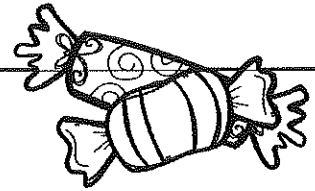


# Weekend 9

MOVIE/TV POSTER

Create a poster about your favorite movie or TV show.





MATH

What goes with these number sentences to make 20?


- |                                          |                                          |
|------------------------------------------|------------------------------------------|
| 1. $1 + \underline{\hspace{2cm}} = 20$   | 11. $0 + \underline{\hspace{2cm}} = 20$  |
| 2. $2 + \underline{\hspace{2cm}} = 20$   | 12. $18 + \underline{\hspace{2cm}} = 20$ |
| 3. $3 + \underline{\hspace{2cm}} = 20$   | 13. $12 + \underline{\hspace{2cm}} = 20$ |
| 4. $4 + \underline{\hspace{2cm}} = 20$   | 14. $15 + \underline{\hspace{2cm}} = 20$ |
| 5. $5 + \underline{\hspace{2cm}} = 20$   | 15. $16 + \underline{\hspace{2cm}} = 20$ |
| 6. $6 + \underline{\hspace{2cm}} = 20$   | 16. $11 + \underline{\hspace{2cm}} = 20$ |
| 7. $7 + \underline{\hspace{2cm}} = 20$   | 17. $14 + \underline{\hspace{2cm}} = 20$ |
| 8. $8 + \underline{\hspace{2cm}} = 20$   | 18. $19 + \underline{\hspace{2cm}} = 20$ |
| 9. $9 + \underline{\hspace{2cm}} = 20$   | 19. $17 + \underline{\hspace{2cm}} = 20$ |
| 10. $10 + \underline{\hspace{2cm}} = 20$ | 20. $13 + \underline{\hspace{2cm}} = 20$ |


ELA

Read the passage and answer the questions.

*Wilson went on a journey across the meadow. He wiggled past ants and he squirmed past puddles. At last he came to a flowerbed. Wilson burrowed into the soil and had a rest.*






- Who went on a journey? \_\_\_\_\_
- What did Wilson pass on his journey? \_\_\_\_\_  
\_\_\_\_\_
- What did Wilson do in the flowerbed? \_\_\_\_\_  
\_\_\_\_\_





MATH

Look at the items in Mr. Green's toy shop.


				
\$4	\$8	\$6	\$3	\$5

How much for these items?


teddy + drum + train	
train + truck + rocking horse	
rocking horse + drum + teddy	
2 trucks + 2 teddies	
2 rocking horses + 2 drums	

ELA

Write as many words as you can under each heading.



-sh	-ch	-ff	-nk
fish	which	cliff	drink



MATH

Solve these questions.

$\begin{array}{r} 10 - \\ \underline{5} \end{array}$	$\begin{array}{r} 10 - \\ \underline{3} \end{array}$	$\begin{array}{r} 16 - \\ \underline{5} \end{array}$	$\begin{array}{r} 24 - \\ \underline{4} \end{array}$	$\begin{array}{r} 32 - \\ \underline{2} \end{array}$
$\begin{array}{r} 56 - \\ \underline{6} \end{array}$	$\begin{array}{r} 29 - \\ \underline{7} \end{array}$	$\begin{array}{r} 19 - \\ \underline{6} \end{array}$	$\begin{array}{r} 40 - \\ \underline{20} \end{array}$	$\begin{array}{r} 70 - \\ \underline{60} \end{array}$
$\begin{array}{r} 14 - \\ \underline{2} \end{array}$	$\begin{array}{r} 39 - \\ \underline{8} \end{array}$	$\begin{array}{r} 35 - \\ \underline{4} \end{array}$	$\begin{array}{r} 50 - \\ \underline{10} \end{array}$	$\begin{array}{r} 80 - \\ \underline{60} \end{array}$

ELA

Rewrite the sentences on the lines below. Add capital letters and ending punctuation.

1. it was a hot and humid night anna could not sleep

---



---

2. she got up for a drink she stopped who was there

---




---

3. it was her dad he was drinking a soda

---



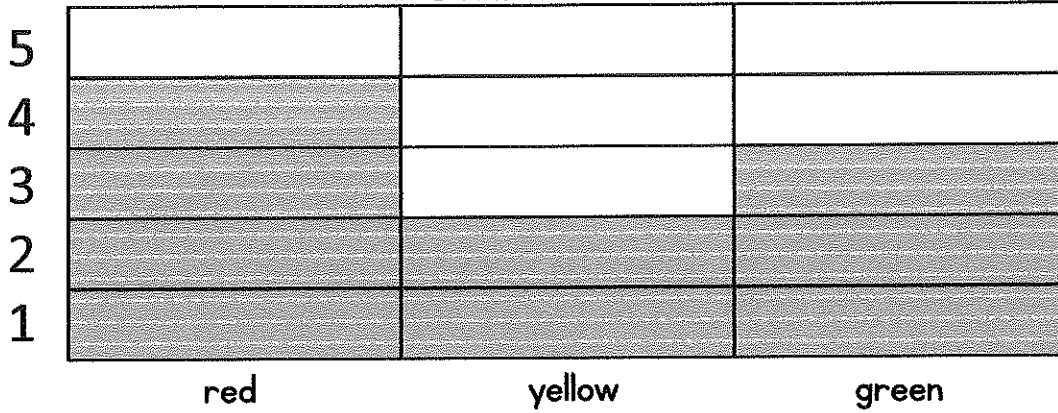
---



MATH

Look carefully at the graph and answer the questions.

IK'S FAVORITE COLORS



1. How many more like green than yellow? \_\_\_\_\_
2. How many fewer like yellow than red? \_\_\_\_\_
3. How many more like red than green? \_\_\_\_\_
4. How many people voted in this survey? \_\_\_\_\_

ELA

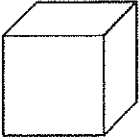
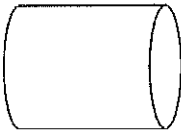

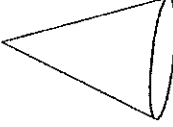
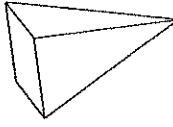
Read the words and decide if they are singular or plural. Draw a picture to match.

children	feet	house	women
coffee	man	mice	tooth

# Friday, Week 10

## MATH

Look at these 3D shapes. Find two objects from the environment that are the same shape and draw them in the box below. Label the items.

## ELA


Look around the room. Write twelve common nouns that you can see. Write an adjective in the box beside to describe your noun.

<u>NOUN</u>	<u>ADJECTIVE</u>	<u>NOUN</u>	<u>ADJECTIVE</u>
1.		7.	
2.		8.	
3.		9.	
4.		10.	
5.		11.	
6.		12.	

# Weekend 10

## VACATION FUN

Draw and label your top six summer vacation moments.



#1

#2

#3

#4

#5

#6

# CERTIFICATE

OF

*Merit*

AWARDED TO

---

SIGNED

---

